

No part of this product may be reproduced in any form or by any electronic or mechanical means, including information storage and retrieval systems, without written permission from the IB.

Additionally, the license tied with this product prohibits commercial use of any selected files or extracts from this product. Use by third parties, including but not limited to publishers, private teachers, tutoring or study services, preparatory schools, vendors operating curriculum mapping services or teacher resource digital platforms and app developers, is not permitted and is subject to the IB's prior written consent via a license. More information on how to request a license can be obtained from <http://www.ibo.org/contact-the-ib/media-inquiries/for-publishers/guidance-for-third-party-publishers-and-providers/how-to-apply-for-a-license>.

Aucune partie de ce produit ne peut être reproduite sous quelque forme ni par quelque moyen que ce soit, électronique ou mécanique, y compris des systèmes de stockage et de récupération d'informations, sans l'autorisation écrite de l'IB.

De plus, la licence associée à ce produit interdit toute utilisation commerciale de tout fichier ou extrait sélectionné dans ce produit. L'utilisation par des tiers, y compris, sans toutefois s'y limiter, des éditeurs, des professeurs particuliers, des services de tutorat ou d'aide aux études, des établissements de préparation à l'enseignement supérieur, des fournisseurs de services de planification des programmes d'études, des gestionnaires de plateformes pédagogiques en ligne, et des développeurs d'applications, n'est pas autorisée et est soumise au consentement écrit préalable de l'IB par l'intermédiaire d'une licence. Pour plus d'informations sur la procédure à suivre pour demander une licence, rendez-vous à l'adresse <http://www.ibo.org/fr/contact-the-ib/media-inquiries/for-publishers/guidance-for-third-party-publishers-and-providers/how-to-apply-for-a-license>.

No se podrá reproducir ninguna parte de este producto de ninguna forma ni por ningún medio electrónico o mecánico, incluidos los sistemas de almacenamiento y recuperación de información, sin que medie la autorización escrita del IB.

Además, la licencia vinculada a este producto prohíbe el uso con fines comerciales de todo archivo o fragmento seleccionado de este producto. El uso por parte de terceros —lo que incluye, a título enunciativo, editoriales, profesores particulares, servicios de apoyo académico o ayuda para el estudio, colegios preparatorios, desarrolladores de aplicaciones y entidades que presten servicios de planificación curricular u ofrezcan recursos para docentes mediante plataformas digitales— no está permitido y estará sujeto al otorgamiento previo de una licencia escrita por parte del IB. En este enlace encontrará más información sobre cómo solicitar una licencia: <http://www.ibo.org/es/contact-the-ib/media-inquiries/for-publishers/guidance-for-third-party-publishers-and-providers/how-to-apply-for-a-license>.

Chemistry
Higher level
Paper 1

Wednesday 22 May 2019 (afternoon)

1 hour

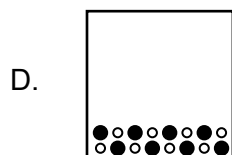
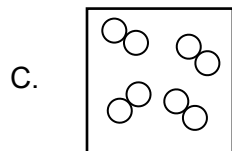
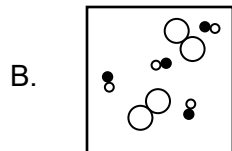
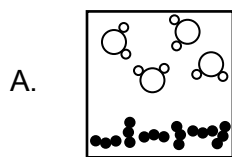
Instructions to candidates

- Do not open this examination paper until instructed to do so.
- Answer all the questions.
- For each question, choose the answer you consider to be the best and indicate your choice on the answer sheet provided.
- The periodic table is provided for reference on page 2 of this examination paper.
- The maximum mark for this examination paper is **[40 marks]**.

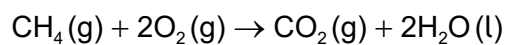
The Periodic Table

	1	2	3	4	5	6	7	8	9	10	11	12	13	14	15	16	17	18		
1	1 H 1.01	Atômico number																	2 He 4.00	
2	3 Li 6.94	4 Be 9.01	Element																	9 F 19.00
3	11 Na 22.99	12 Mg 24.31	Relative atomic mass																	17 Cl 35.45
4	19 K 39.10	20 Ca 40.08	21 Sc 44.96	22 Ti 47.87	23 V 50.94	24 Cr 52.00	25 Mn 54.94	26 Fe 55.85	27 Co 58.93	28 Ni 58.69	29 Cu 63.55	30 Zn 65.38	31 Ga 69.72	32 Ge 72.63	33 As 74.92	34 Se 78.96	35 Br 79.90	36 Kr 83.90		
5	37 Rb 85.47	38 Sr 87.62	39 Y 88.91	40 Zr 91.22	41 Nb 92.91	42 Mo 95.96	43 Tc (98)	44 Ru 101.07	45 Rh 102.91	46 Pd 106.42	47 Ag 107.87	48 Cd 112.41	49 In 114.82	50 Sn 118.71	51 Sb 121.76	52 Te 127.60	53 I 126.90	54 Xe 131.29		
6	55 Cs 132.91	56 Ba 137.33	57 † La 138.91	72 Hf 178.49	73 Ta 180.95	74 W 183.84	75 Re 186.21	76 Os 190.23	77 Ir 192.22	78 Pt 195.08	79 Au 196.97	80 Hg 200.59	81 Tl 204.38	82 Pb 207.2	83 Bi 208.98	84 Po (209)	85 At (210)	86 Rn (222)		
7	87 Fr (223)	88 Ra (226)	89 † Ac (227)	104 Rf (267)	105 Db (268)	106 Sg (269)	107 Bh (270)	108 Hs (269)	109 Mt (278)	110 Ds (281)	111 Rg (281)	112 Cn (285)	113 Unt (286)	114 Uug (289)	115 Uup (288)	116 Uuh (293)	117 Uus (294)	118 Uuo (294)		
†	58 Ce 140.12	59 Pr 140.91	60 Nd 144.24	61 Pm (145)	62 Sm 150.36	63 Eu 151.96	64 Gd 157.25	65 Tb 158.93	66 Dy 162.50	67 Ho 164.93	68 Er 167.26	69 Tm 168.93	70 Yb 173.05	71 Lu 174.97						
‡	90 Th 232.04	91 Pa 231.04	92 U 238.03	93 Np (237)	94 Pu (244)	95 Am (243)	96 Cm (247)	97 Bk (247)	98 Cf (251)	99 Es (252)	100 Fm (257)	101 Md (258)	102 No (259)	103 Lr (262)						

1. Which diagram represents a heterogeneous mixture?



2. What volume of carbon dioxide, $\text{CO}_2(\text{g})$, can be obtained by reacting 1 dm^3 of methane, $\text{CH}_4(\text{g})$, with 1 dm^3 of oxygen, $\text{O}_2(\text{g})$?



A. 0.5 dm^3

B. 1 dm^3

C. 2 dm^3

D. 6 dm^3

3. What is the empirical formula of a hydrocarbon with 75% carbon and 25% hydrogen by mass?

A. C_3H

B. CH_2

C. C_2H_6

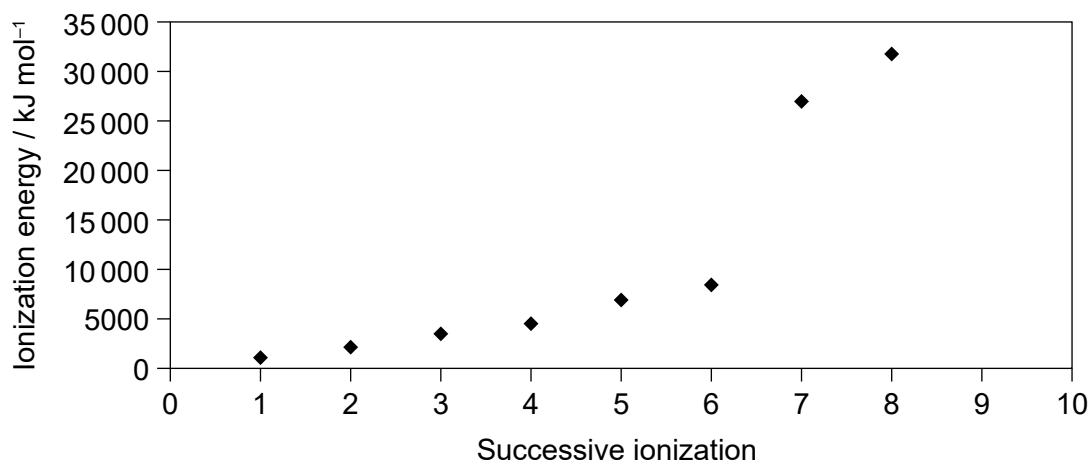
D. CH_4

Turn over

4. What is the ground state electron configuration of an atom of chromium, Cr ($Z = 24$)?

- A. $[\text{Ar}]3d^6$
- B. $[\text{Ar}]4s^23d^4$
- C. $[\text{Ar}]4s^13d^5$
- D. $[\text{Ar}]4s^24p^4$

5. Which element is represented by the first eight successive ionization energies on the graph?



- A. Mg
- B. S
- C. Cl
- D. Ar

6. Which describes an atom of bismuth, Bi ($Z = 83$)?

	Principal energy level number	Number of valence electrons
A.	5	3
B.	5	5
C.	6	5
D.	6	15

7. Which series represents atoms in order of decreasing atomic radius?
- A. $N > C > Be > Mg$
 - B. $Mg > N > C > Be$
 - C. $Be > C > N > Mg$
 - D. $Mg > Be > C > N$
8. Which electrons are removed from iron ($Z = 26$) to form iron(II)?
- A. two 3d electrons
 - B. two 4s electrons
 - C. one 4s electron and one 3d electron
 - D. two 4p electrons
9. What is the order of increasing boiling point?
- A. $CH_3CH_2CH_2CH_3 < CH_3CH(OH)CH_3 < CH_3COCH_3 < CH_3CO_2H$
 - B. $CH_3CH_2CH_2CH_3 < CH_3COCH_3 < CH_3CH(OH)CH_3 < CH_3CO_2H$
 - C. $CH_3CO_2H < CH_3COCH_3 < CH_3CH(OH)CH_3 < CH_3CH_2CH_2CH_3$
 - D. $CH_3CH_2CH_2CH_3 < CH_3COCH_3 < CH_3CO_2H < CH_3CH(OH)CH_3$
10. What is the IUPAC name of $NiCO_3$?
- A. nickel(II) carbonate
 - B. nickel carbonate
 - C. nickel(I) carbonate
 - D. nitrogen(I) carbonate

Turn over

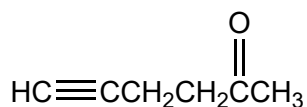
11. Which combination corresponds to a strong metallic bond?

	Charge on the metal ion	Radius of ion
A.	large	large
B.	large	small
C.	small	small
D.	small	large

12. Which species has delocalized electrons?

- A. OH^-
- B. H_2CO
- C. CO_2
- D. CO_3^{2-}

13. How many carbon atoms are sp^3 , sp^2 and sp hybridized in the molecule?

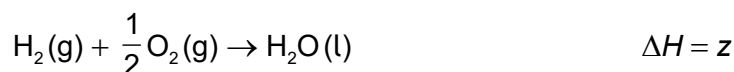
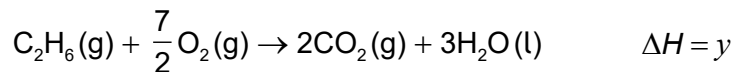
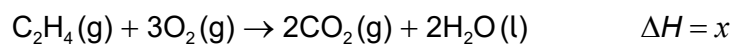
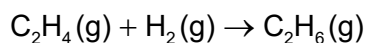


	sp^3	sp^2	sp
A.	3	1	2
B.	2	1	3
C.	3	2	1
D.	3	2	2

14. When equal masses of X and Y absorb the same amount of energy, their temperatures rise by 5°C and 10°C respectively. Which is correct?

- A. The specific heat capacity of X is twice that of Y.
- B. The specific heat capacity of X is half that of Y.
- C. The specific heat capacity of X is one fifth that of Y.
- D. The specific heat capacity of X is the same as Y.

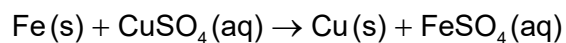
15. What is the enthalpy change of reaction for the following equation?



- A. $x + y + z$
- B. $-x - y + z$
- C. $x - y - z$
- D. $x - y + z$
16. Which is correct for the reaction $\text{H}_2\text{O}(\text{g}) \rightarrow \text{H}_2\text{O}(\text{l})$?
- A. Enthalpy increases and entropy increases.
- B. Enthalpy decreases and entropy increases.
- C. Enthalpy increases and entropy decreases.
- D. Enthalpy decreases and entropy decreases.
17. Which equation represents the standard enthalpy of atomization of bromine, Br_2 ?
- A. $\frac{1}{2}\text{Br}_2(\text{l}) \rightarrow \text{Br}(\text{g})$
- B. $\text{Br}_2(\text{l}) \rightarrow 2\text{Br}(\text{g})$
- C. $\text{Br}_2(\text{l}) \rightarrow 2\text{Br}(\text{l})$
- D. $\frac{1}{2}\text{Br}_2(\text{l}) \rightarrow \text{Br}(\text{l})$

Turn over

18. Which properties can be monitored to determine the rate of the reaction?



- I. change in volume
- II. change in temperature
- III. change in colour

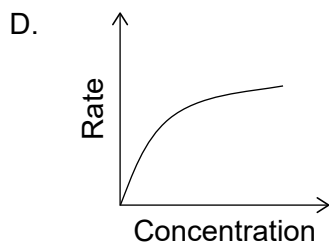
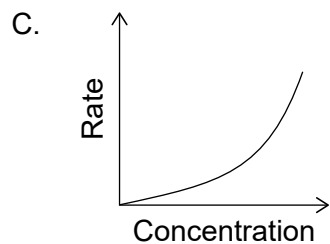
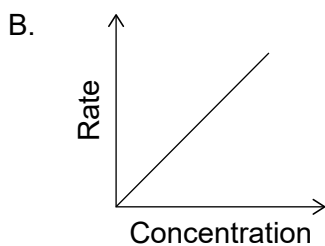
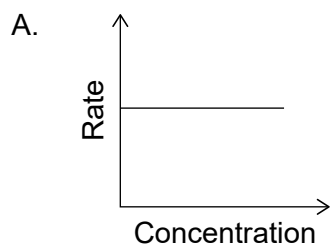
- A. I and II only
- B. I and III only
- C. II and III only
- D. I, II and III

19. Which conditions are required for the reaction between two molecules?

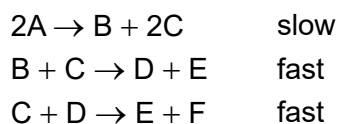
- I. a collision
- II. $E \geq E_a$
- III. proper orientation

- A. I and II only
- B. I and III only
- C. II and III only
- D. I, II and III

20. Which graph is obtained from a first order reaction?



21. Which is correct for the reaction mechanism shown?

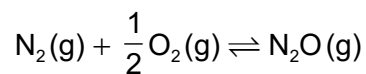


	Equation of overall reaction	Rate equation
A.	$2A \rightarrow E + F$	$\text{rate} = k[A]^2$
B.	$2A \rightarrow 2E + F$	$\text{rate} = k[C][D]$
C.	$2A + B + 2C + D \rightarrow 2E + F$	$\text{rate} = k[A]^2[B][C]^2[D]$
D.	$2A \rightarrow 2E + F$	$\text{rate} = k[A]^2$

Turn over

22. K_c for $2\text{N}_2\text{O}(\text{g}) \rightleftharpoons 2\text{N}_2(\text{g}) + \text{O}_2(\text{g})$ is 7.3×10^{34} .

What is K_c for the following reaction, at the same temperature?



- A. 7.3×10^{34}
- B. $\frac{1}{\sqrt{7.3 \times 10^{34}}}$
- C. $\frac{2}{7.3 \times 10^{34}}$
- D. $\frac{1}{2 \times 7.3 \times 10^{34}}$
23. Which is correct for a reaction with a positive change in Gibbs free energy, ΔG^\ominus ?
- A. The formation of reactants is favoured.
- B. The formation of products is favoured.
- C. The reaction is at equilibrium.
- D. The reaction is spontaneous.
24. Which solution is basic at 25°C ?

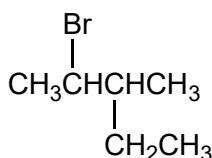
$$K_w = 1.0 \times 10^{-14}$$

- A. $[\text{H}^+] = 1.0 \times 10^{-3} \text{ mol dm}^{-3}$
- B. $[\text{OH}^-] = 1.0 \times 10^{-13} \text{ mol dm}^{-3}$
- C. solution of $\text{pH} = 4.00$
- D. $[\text{H}_3\text{O}^+] = 1.0 \times 10^{-13} \text{ mol dm}^{-3}$

25. With which do most acids react?
- I. sodium hydrogen carbonate
 - II. magnesium
 - III. calcium sulfate
- A. I and II only
 - B. I and III only
 - C. II and III only
 - D. I, II and III
26. Which is a Lewis acid but not a Brønsted–Lowry acid?
- A. AlCl_3
 - B. $\text{CH}_3\text{CO}_2\text{H}$
 - C. HF
 - D. CCl_4
27. Which has the strongest conjugate base?
- A. HCOOH ($K_a = 1.8 \times 10^{-4}$)
 - B. HNO_2 ($K_a = 7.2 \times 10^{-4}$)
 - C. HCN ($K_a = 6.2 \times 10^{-10}$)
 - D. HIO_3 ($K_a = 1.7 \times 10^{-1}$)
28. Which product will be obtained at the anode (positive electrode) when molten NaCl is electrolysed?
- A. Na(l)
 - B. Cl(g)
 - C. Cl_2 (g)
 - D. Na(s)

Turn over

29. Where does oxidation occur in a voltaic cell?
- A. positive electrode and anode
 - B. negative electrode and anode
 - C. positive electrode and cathode
 - D. negative electrode and cathode
30. Which factors affect the amount of product formed at the cathode during electrolysis of molten salts?
- I. current
 - II. time
 - III. charge on the cation
- A. I and II only
 - B. I and III only
 - C. II and III only
 - D. I, II and III
31. Which is **not** a requirement of the standard hydrogen electrode (SHE)?
- A. $V = 1 \text{ dm}^3$
 - B. $p(\text{H}_2) = 100 \text{ kPa}$
 - C. use of platinum as the electrode material
 - D. $[\text{H}_3\text{O}^+] = 1 \text{ mol dm}^{-3}$
32. What is the IUPAC name of the following molecule?

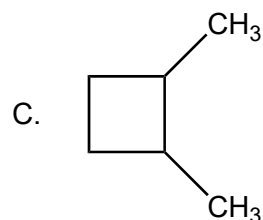
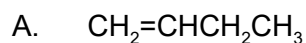


- A. 2-bromo-3-ethylbutane
- B. 3-methyl-4-bromopentane
- C. 2-ethyl-3-bromobutane
- D. 2-bromo-3-methylpentane

33. Which is a major product of the electrophilic addition of hydrogen chloride to propene?
- A. $\text{ClCH}_2\text{CH}=\text{CH}_2$
 - B. $\text{CH}_3\text{CH}(\text{Cl})\text{CH}_3$
 - C. $\text{CH}_3\text{CH}_2\text{CH}_2\text{Cl}$
 - D. $\text{CH}_3\text{CH}=\text{CHCl}$
34. Which alcohol would produce a carboxylic acid when heated with acidified potassium dichromate(VI)?
- A. propan-2-ol
 - B. butan-1-ol
 - C. 2-methylpropan-2-ol
 - D. pentan-3-ol
35. Which solvent is aprotic?
- A. H_2O
 - B. $\text{C}_6\text{H}_5\text{CH}_3$
 - C. CH_3OH
 - D. CH_3NH_2
36. Which statement is **not** correct regarding benzene?
- A. It is planar.
 - B. The ring contains delocalized electrons.
 - C. It always reacts in the same way as alkenes.
 - D. The carbon–carbon bond has a bond order of 1.5.

Turn over

37. Which compound can exist as *cis*- and *trans*-isomers?



38. How should a measurement of 5.00 g from a balance be recorded?

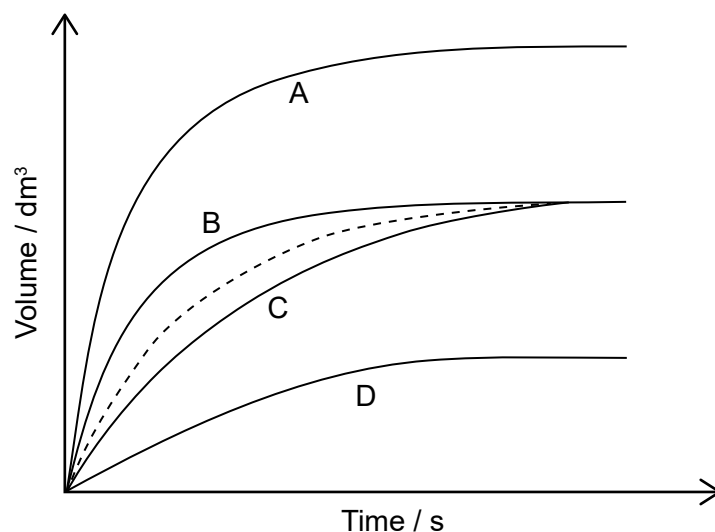
A. $5.00 \pm 0.1 \text{ g}$

B. $5.00 \pm 0.01 \text{ g}$

C. $5.00 \pm 1 \text{ g}$

D. $5.00 \pm 0.001 \text{ g}$

39. The dotted line represents the formation of oxygen, $\text{O}_2(\text{g})$, from the uncatalysed complete decomposition of hydrogen peroxide, $\text{H}_2\text{O}_2(\text{aq})$.



Which curve represents a catalysed reaction under the same conditions?

40. Which can be identified using infrared (IR) spectroscopy?
- A. functional groups
 - B. molar mass
 - C. 3-D configuration
 - D. bond angle
-